


**දෙවන වාර පරීක්ෂණය - 7 ශ්‍රේණිය - 2017**  
**Second Term Test - Grade 7 - 2017**

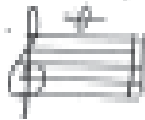
**Name/Index No:..... Western Music Time:- 02 hours**

**Underline the correct answer**

- 01. Which Bird sings during the festive season?  
 (1) mynah (2) Crow (3) Parrot (4) Koha
- 02. Pleasant sound is a  
 (1) Thundering (2) Dogs barking (3) Bomb blast (4) Bird singing
- 03. Which drum is called Pokuru Bera?  
 (1) Daula (2) Thammattama (3) Getabera (4) Yakbera
- 04. Which period is belongs to 1600 - 1750  
 (1) Romantic (2) Modern (3) Classicle (4) Baroque
- 05. Who wrote "The Entatainer ?  
 (1) J. S. Bach (2) Mozart (3) Beethoven (4) Scott Joplin
- 06. Correct way of writing musical Alphabet?  
 (1) A B C D E F G (2) C D E F G A B (3) F G A B C D E (4) E F G A B C D
- 07. Correct oder of the notes are  
  
 (1) D F E G F E (2) C D E F G A  
 (3) D E F G F E (4) D F G E F E
- 08. Black note with a stem is called?  
 (1) Minim (2) Crotchet (3) Breve (4) Quaver
- 09. Where do you write the middle C in the bass clef  
 (1) Above the stave (2) Below the stave (3) In a space (4) On a line
- 10. How many notes are there in an Octave?  
 (1) 7 (2) 6 (3) 5 (4) 8
- 11. How many players or performers are their in a (trio)?  
 (1) 2 players (2) 1 player (3) 3 players (4) 4 players
- 12. Which instrument uses for accompany virindu?  
 (1) Yakbera (2) Rabana (3) Getabera (4) Melodica


13. Who was nick named as "Baila Chakrawarthy"?  
 (1) Volley Bastian (2) Amaradeva (3) Nanda Malani (4) Sena Fonseka

14. Which note is know as whole note  
 (1)  (2)  (3)  (4) 

15. Correct name of this note is  
 (1) Middle C (2) B  
 (3) A (4) E

16. How many Semitones are there in a Tone?  
 (1) Six (2) Four (3) Three (4) Two

17. What is the English meaning of this Italian term? [Fortissimo]  
 (1) Very soft (2) Very loud (3) Moderately loud (4) Lout

18. Correct time signatura for this thrythm pattern is?  
  
 (1)  $\frac{2}{4}$  (2)  $\frac{4}{4}$  (3)  $\frac{3}{4}$  (4)  $\frac{2}{2}$


19. Equal rest for this note is (  )  
 (1)  (2)  (3)  (4) 

20. Smallest distance between two notes are calles?  
 (1) Interval (2) Tone (3) Time Signatures (4) Semitone

**Part II**

**Answer three questions including the 1st question.**

01. (1) (a) Name the two notes and state whether the distance between the given two notes is a Tone or semitone?




Name .....  
 of notes

Semitone .....  
 or tone

5 marks

(b) Name these notes



3 marks

(c) Write these notes.



E in a space

A on a line

2 marks

(2) Put a suitable time signatures.

- (a) (1) Simple duple with Minim beats
- (2) Simple Triple with Crotchet beats
- (3) Simple quadruple with Crotchet beats

3 marks

Describe the following time signature

- (b)  $\frac{3}{4}$  —
- $\frac{2}{2}$  —
- $\frac{4}{4}$  —

3 marks

(c) Write suitable time signatures for these rhythm patterns.



4 marks

03. Name the following notes



(1)


(5 marks)

(b) Write the following rests.

(1) Breve rest

(2)

(2) Semibreve rest


(3) Crotchet rest

(3)

(4) Quarter rest



(5) Minim rest

(5)


(5 marks)

04. Answer the following questions.

- (a)
- (1) Going up scale is called.....
  - (2) Going down scale is called .....
  - (3) How many notes are there in an Octave? .....
  - (4) The fourth note is called in a scale is .....
  - (5) Semitones lies between in a scale is? .....

(2 1/2 marks)

(b) Write the English meaning of the following abbreviations/symbol

- p -  
ff -  
mf -  
mp -  
p -

2 1/2 marks

(c) Describe briefly five of the following

- |                |                  |
|----------------|------------------|
| (1) Duet       | (2) Solo         |
| (3) Trio       | (4) G. F. Handel |
| (5) J. S. Bach | (6) Semitones    |
| (7) Virindu    | (8) Baila        |

5 marks